



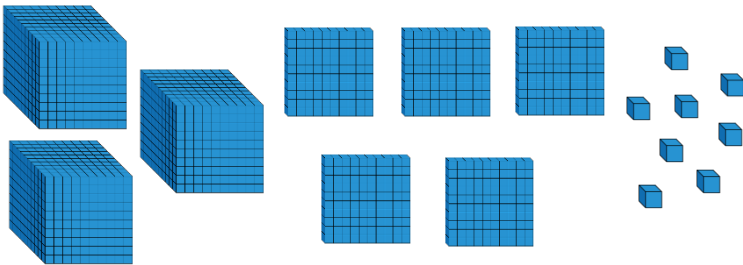


Name _____

- 1 Mo represents a number using counters.

1,000s	100s	10s	1s
			

Alex represents a number using Base 10



What is the total of their numbers?

2 marks

- 2 Amir's car costs £1,749
Whitney's car costs £2,300
What is the difference between the cost of the two cars?

£ _____

1 mark

- 3 Max says, "460 plus 1340 equals 1700"
Use a subtraction to show that Max is wrong.

1 mark

- 4 Work out the missing number in the bar model!

17,540		
3,960	_____	640

2 marks

- 5 Complete the missing numbers.

$$10,300 + 5,420 = 9,300 + \underline{\hspace{2cm}}$$

$$10,300 + 5,420 = 10,500 + \underline{\hspace{2cm}}$$

2 marks

- 6 The numbers in this sequence decrease by the same amount each time.
Complete the sequence.

64,290 63,390 62,490 _____

2 marks

- 7 On Saturday a zoo has 50,285 visitors.
On Sunday the zoo has 10,500 more visitors than Saturday.
The zoo keeper says, "We have had over one hundred thousand visitors across the two days."
Do you agree? Explain your answer.

- 8 Work out
 $10,000 - 4,318$

$126,000 + 7,500$

2 marks

1 mark

1 mark

- 9 Work out the missing number.

$$84,503 - \underline{\hspace{2cm}} = 68,125 + 3,900$$



2 marks




- 10 Complete the missing digits.




	8	9	<input type="text"/>	6	2
-		1	3	4	9
<hr/>					
	8	7	7	<input type="text"/>	3

2 marks

- 11 Find the missing sum.

 +  = 1,200

 +  +  = 1,900

 +  +  = _____

2 marks

Circle how confident you feel with addition & subtraction.

1 2 3 4 5
Not Very
confident confident